



**PERIODIC TEST- II**

**NAME:** \_\_\_\_\_

**Roll no:**

**SUBJECT: SCIENCE**

**GRADE: 3** \_\_\_\_\_

**DATE: 24. 8. 22**

**Time: 11/2 Hours**

**Marks obtained**

**Total 40**

**I. Choose the correct answer**

**5 x 1 =5**

1.The tiny pores present on the leaf is called \_\_\_\_\_.

- a.Stomata    b.Cells    c.Grains    d.Chlorophyll

2. Seeds are located inside the \_\_\_\_\_.

- a. Root    b. Fruits    c. Stem    d. Leaves

3. \_\_\_\_\_ absorbs water from the soil.

- a.Branches    b.Stem    c.Rootd. Leaves

4. Leaves are green due to presence of green pigment called \_\_\_\_\_.

- a. Chlorophyll    b.Hydrophyll    c.Macrophyll

d. Xerophytes

5.Which part of the plant transports water up to the rest of the plant?

- a. Stem    b. Flower    c. Root    d. Leaves

**II. Complete the following****3 x 1 = 3**

6. Rose: Shrub, Grapevine: \_\_\_\_\_

7. Mint: \_\_\_\_\_, Neem: Tree

8. Watermelon: \_\_\_\_\_, Grass: Herb

**III. Match the following** 2x 1/2 = 2

9.	Tall and strong plants are called	Climbers
10.	Plants which grow with the help of support	Herbs
11.	Short and bushy plants are called	Trees
12.	Plants which are very short and have soft stems are called	Shrubs

**IV. Differentiate the following**

**3 x 3 = 9**

13. Tap root and Fibrous root with diagram.

<b>Tap root</b>	<b>Fibrous root</b>

14. Shrub and tree

<b>Shrub</b>	<b>Tree</b>

15.Climber and Creeper

<b>Climber</b>	<b>Creeper</b>

**V. Answer the following**

**4 x 2 =8**

16.Pumpkin and watermelon plants spread along the ground. Why?

---

---

17.What are essentials things needed for a plant to grow?

---

---

18. Write any two leaves name which is used as medicines.

---


---

19. Write the importance of trees.

---

---

**VI. Draw the parts of the plant and label it.4**




**VII. Explain the functions for the given parts.**

**4**

20-




21.



22.



23.



VIII. Observe the given pictures and colour the pictures to show that how you will take care of plants and put a tick in the given boxes.

5



